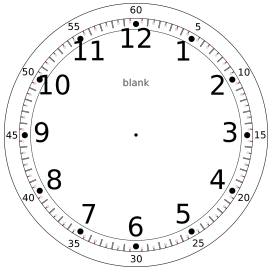
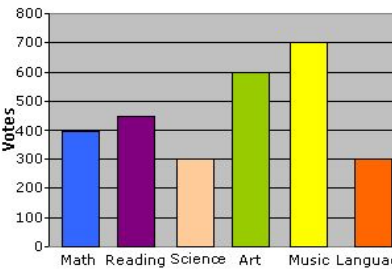
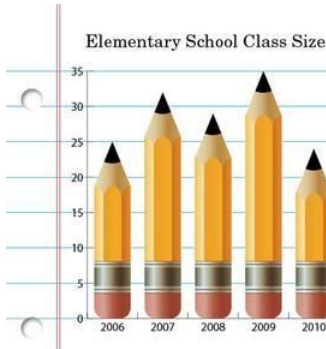


9 Name _____

Week 2

August 19-22, 2019

Topic	MONDAY	Mon. Work Space	TUESDAY	Tues. Work Space
1	$\begin{array}{r} 689 \\ -237 \\ \hline \end{array}$		Jose paid for a bat that cost \$38 and a helmet that cost \$24. How much did Jose spend in all for the two items?	
2	I am a four-digit number. The digit with the greatest place value is 8. The digit with the least place value is 6. The digit in my hundreds place is 3 more than the digit in my tens place. The digit in my tens place is 2.	What number am I? _____	$87+24+35=$	Line numbers up vertically before adding. T O
3	Keith has 2 boxes of marbles. There are 5 marbles in each box. How many marbles does Keith have? Draw a picture.		What is the value of the digit 4 in the number 8,648?	
4	What is the least number that can be written using the digits 6, 3, 8, 2	A. 8,632 B. 3,826 C. 2,368 D. 2,386	What are the next 4 numbers in this pattern? 3, 6, 9, 12 _____, _____, _____, _____	Which numbers are odd? Which numbers are even?
5	Bailey used 4 thousands, 1 hundred, and 7 ones to model a number. What number did she model?	A. 417 B. 714 C. 4,170 D. 4,107	Write this number in expanded form and standard form. eight hundred sixty-three	Expanded form: Standard form:
6	Which digit is in the ones place in the number 9,642?	_____		Draw hands on the clock to show 4:35. What time will it be 10 minutes after 4:35?

	Wednesday	Work space	Thursday	Work space
1	Which has an even sum? A. $3 + 8$ B. $2 + 7$ C. $3 + 5$ D. $4 + 9$		Write this word form number in standard and expanded form. Nine thousand, seventy-four	Standard: Expanded:
2	Which is not a way to show 93?	A. $90 + 3$ B. 9 tens 3 ones C. 93 ones D. 9 hundreds 3 ones	Tell the place value and the value of the underlined digit. 2, <u>8</u> 65	Place value _____ Value _____
3	Write 2,387 in expanded form.		Compare these numbers. $< > =$	2,030 _____ 2,302
4	I have 5 thousands, 9 tens and 3 ones. What number am I?	_____ , _____	I have 8 thousands, 7 hundreds and 5 ones. What number am I?	_____ , _____
5		According to the bar graph, how many more students voted for Music than Math as their favorite subject?		According to the graph, what year had the largest class size in Elementary School?
6	Write this expanded form number in standard form. $2,000 + 300 + 40 + 8$		Write this expanded form number in standard form. $8,000 + 4$	