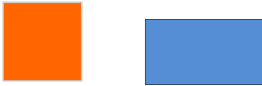

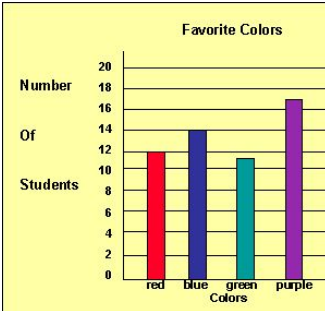
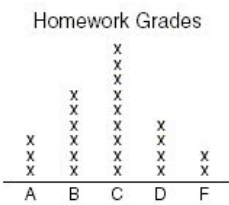


Name _____

August 26-30, 2019 Week 3

Topic	MONDAY	Mon. Work Space	TUESDAY	Tues. Work Space
1	Write this number in standard form. 2 thousands, 3 hundreds, 4 ones		Copy problem in workspace to solve. $\begin{array}{r} 921 \\ + 39 \\ \hline \end{array}$	H T O
2	$687 - 334 =$ Copy problem in work space to solve.	H T O	$569 - 38 =$ Copy problem in work space to solve.	H T O
3	Karter displayed his baseball cards in 3 rows . There are 4 cards in each row . How many baseball cards does he have? Draw a picture.		Circle the square. Put an x on the rectangle.	
4	What is the value of the digit 5 in the number 6, <u>5</u> 01?		Write in standard form. $7,000 + 80 + 4$	____, ____ _
5	What is the place value of the digit 5 in the number $52,097$		Which digit in this number has the greatest value ? $3,059$	
6	A. Is 18 closer to 10 or 20? B. Is 22 closer to 20 or 30? C. Is 66 closer to 60 or 70?	A. _____ B. _____ C. _____	Write this number in standard form. 2 thousands, 3 hundreds, 4 ones	____, ____ _

Topic	WEDNESDAY	Wed. Work Space	THURSDAY	Thurs. Work Space
1	What time is shown on the clock? 		There were 2,899 fans at the football game. Then, 867 fans left the game. How many fans were left in the stadium?	TH, H T O
2	Which two tens is 73 between? Which ten is 73 closer to?	_____ and _____ _____	Which two tens is 17 between? Which ten is 17 closer to?	_____ and _____ _____
3	Write the standard form number for: 9 thousands, 4 tens, 7 ones	_____, _____, _____, _____	Write in standard form. $3,000 + 90 + 4$	
4		What is the title of the bar graph? How many students chose purple & red as their favorite colors? Show your work.		
5	Which two tens is 64 between?		Round 64 to the nearest 10.	
6	Write 2,014 in expanded form.		What is 48 rounded to the nearest 10?	